



# Math Test – No Calculator

25 MINUTES, 20 QUESTIONS

Turn to Section 3 of your answer sheet to answer the questions in this section.

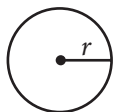
## DIRECTIONS

For questions 1-15, solve each problem, choose the best answer from the choices provided, and fill in the corresponding circle on your answer sheet. For questions 16-20, solve the problem and enter your answer in the grid on the answer sheet. Please refer to the directions before question 16 on how to enter your answers in the grid. You may use any available space in your test booklet for scratch work.

## NOTES

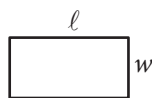
- The use of a calculator **is not permitted**.
- All variables and expressions used represent real numbers unless otherwise indicated.
- Figures provided in this test are drawn to scale unless otherwise indicated.
- All figures lie in a plane unless otherwise indicated.
- Unless otherwise indicated, the domain of a given function  $f$  is the set of all real numbers  $x$  for which  $f(x)$  is a real number.

## REFERENCE

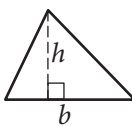


$$A = \pi r^2$$

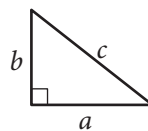
$$C = 2\pi r$$



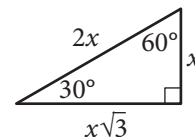
$$A = \ell w$$



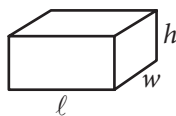
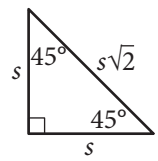
$$A = \frac{1}{2}bh$$



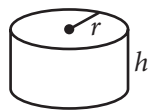
$$c^2 = a^2 + b^2$$



Special Right Triangles



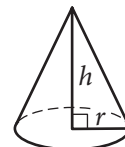
$$V = \ell wh$$



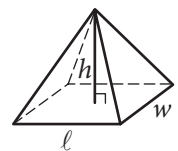
$$V = \pi r^2 h$$



$$V = \frac{4}{3}\pi r^3$$



$$V = \frac{1}{3}\pi r^2 h$$



$$V = \frac{1}{3}\ell wh$$

The number of degrees of arc in a circle is 360.

The number of radians of arc in a circle is  $2\pi$ .

The sum of the measures in degrees of the angles of a triangle is 180.



1

If  $5x + 6 = 10$ , what is the value of  $10x + 3$  ?

- A) 4
- B) 9
- C) 11
- D) 20

2

$$\begin{aligned}x + y &= 0 \\ 3x - 2y &= 10\end{aligned}$$

Which of the following ordered pairs  $(x, y)$  satisfies the system of equations above?

- A)  $(3, -2)$
- B)  $(2, -2)$
- C)  $(-2, 2)$
- D)  $(-2, -2)$

3

A landscaping company estimates the price of a job, in dollars, using the expression  $60 + 12nh$ , where  $n$  is the number of landscapers who will be working and  $h$  is the total number of hours the job will take using  $n$  landscapers. Which of the following is the best interpretation of the number 12 in the expression?

- A) The company charges \$12 per hour for each landscaper.
- B) A minimum of 12 landscapers will work on each job.
- C) The price of every job increases by \$12 every hour.
- D) Each landscaper works 12 hours a day.

4

$$9a^4 + 12a^2b^2 + 4b^4$$

Which of the following is equivalent to the expression shown above?

- A)  $(3a^2 + 2b^2)^2$
- B)  $(3a + 2b)^4$
- C)  $(9a^2 + 4b^2)^2$
- D)  $(9a + 4b)^4$



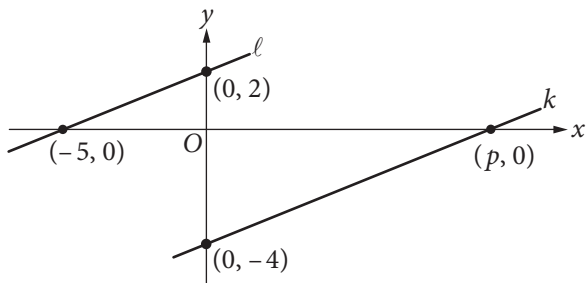
5

$$\sqrt{2k^2 + 17} - x = 0$$

If  $k > 0$  and  $x = 7$  in the equation above, what is the value of  $k$ ?

- A) 2
- B) 3
- C) 4
- D) 5

6



In the  $xy$ -plane above, line  $\ell$  is parallel to line  $k$ . What is the value of  $p$ ?

- A) 4
- B) 5
- C) 8
- D) 10

7

If  $\frac{x^{a^2}}{x^{b^2}} = x^{16}$ ,  $x > 1$ , and  $a + b = 2$ , what is the value

of  $a - b$ ?

- A) 8
- B) 14
- C) 16
- D) 18

8

$$nA = 360$$

The measure  $A$ , in degrees, of an exterior angle of a regular polygon is related to the number of sides,  $n$ , of the polygon by the formula above. If the measure of an exterior angle of a regular polygon is greater than  $50^\circ$ , what is the greatest number of sides it can have?

- A) 5
- B) 6
- C) 7
- D) 8



9

The graph of a line in the  $xy$ -plane has slope 2 and contains the point  $(1, 8)$ . The graph of a second line passes through the points  $(1, 2)$  and  $(2, 1)$ . If the two lines intersect at the point  $(a, b)$ , what is the value of  $a + b$  ?

- A) 4
- B) 3
- C) -1
- D) -4

10

Which of the following equations has a graph in the  $xy$ -plane for which  $y$  is always greater than or equal to  $-1$  ?

- A)  $y = |x| - 2$
- B)  $y = x^2 - 2$
- C)  $y = (x - 2)^2$
- D)  $y = x^3 - 2$

11

Which of the following complex numbers is equivalent to  $\frac{3 - 5i}{8 + 2i}$  ? (Note:  $i = \sqrt{-1}$ )

- A)  $\frac{3}{8} - \frac{5i}{2}$
- B)  $\frac{3}{8} + \frac{5i}{2}$
- C)  $\frac{7}{34} - \frac{23i}{34}$
- D)  $\frac{7}{34} + \frac{23i}{34}$

12

$$R = \frac{F}{N + F}$$

A website uses the formula above to calculate a seller's rating,  $R$ , based on the number of favorable reviews,  $F$ , and unfavorable reviews,  $N$ . Which of the following expresses the number of favorable reviews in terms of the other variables?

- A)  $F = \frac{RN}{R - 1}$
- B)  $F = \frac{RN}{1 - R}$
- C)  $F = \frac{N}{1 - R}$
- D)  $F = \frac{N}{R - 1}$



13

What is the sum of all values of  $m$  that satisfy  $2m^2 - 16m + 8 = 0$  ?

- A)  $-8$
- B)  $-4\sqrt{3}$
- C)  $4\sqrt{3}$
- D)  $8$

14

A radioactive substance decays at an annual rate of 13 percent. If the initial amount of the substance is 325 grams, which of the following functions  $f$  models the remaining amount of the substance, in grams,  $t$  years later?

- A)  $f(t) = 325(0.87)^t$
- B)  $f(t) = 325(0.13)^t$
- C)  $f(t) = 0.87(325)^t$
- D)  $f(t) = 0.13(325)^t$

15

The expression  $\frac{5x-2}{x+3}$  is equivalent to which of the following?

- A)  $\frac{5-2}{3}$
- B)  $5 - \frac{2}{3}$
- C)  $5 - \frac{2}{x+3}$
- D)  $5 - \frac{17}{x+3}$



**DIRECTIONS**

For questions 16–20, solve the problem and enter your answer in the grid, as described below, on the answer sheet.

- Although not required, it is suggested that you write your answer in the boxes at the top of the columns to help you fill in the circles accurately. You will receive credit only if the circles are filled in correctly.
- Mark no more than one circle in any column.
- No question has a negative answer.
- Some problems may have more than one correct answer. In such cases, grid only one answer.
- Mixed numbers** such as  $3\frac{1}{2}$  must be gridded as 3.5 or 7/2. (If 

3	1	/	2
•	•	•	•

 is entered into the grid, it will be interpreted as  $\frac{31}{2}$ , not  $3\frac{1}{2}$ .)
- Decimal answers:** If you obtain a decimal answer with more digits than the grid can accommodate, it may be either rounded or truncated, but it must fill the entire grid.

Answer:  $\frac{7}{12}$

Write answer → in boxes.

7	/	1	2
•	•	•	•
0	0	0	0
1	1	1	1
2	2	2	2
3	3	3	3
4	4	4	4
5	5	5	5
6	6	6	6
7	7	7	7
8	8	8	8
9	9	9	9

Grid in result.

Answer: 2.5

	2	.	5
•	•	•	•
0	0	0	0
1	1	1	1
2	2	2	2
3	3	3	3
4	4	4	4
5	5	5	5
6	6	6	6
7	7	7	7
8	8	8	8
9	9	9	9

← Fraction line

← Decimal point

Acceptable ways to grid  $\frac{2}{3}$  are:

	2	/	3
•	•	•	•
0	0	0	0
1	1	1	1
2	2	2	2
3	3	3	3
4	4	4	4
5	5	5	5
6	6	6	6
7	7	7	7
8	8	8	8
9	9	9	9

.	6	6	6
•	•	•	•
0	0	0	0
1	1	1	1
2	2	2	2
3	3	3	3
4	4	4	4
5	5	5	5
6	6	6	6
7	7	7	7
8	8	8	8
9	9	9	9

.	6	6	7
•	•	•	•
0	0	0	0
1	1	1	1
2	2	2	2
3	3	3	3
4	4	4	4
5	5	5	5
6	6	6	6
7	7	7	7
8	8	8	8
9	9	9	9

Answer: 201 – either position is correct

	2	0	1
•	•	•	•
0	0	0	0
1	1	1	1
2	2	2	2
3	3	3	3

2	0	1	
•	•	•	•
0	0	0	0
1	1	1	1
2	2	2	2
3	3	3	3

**NOTE:** You may start your answers in any column, space permitting. Columns you don't need to use should be left blank.



16

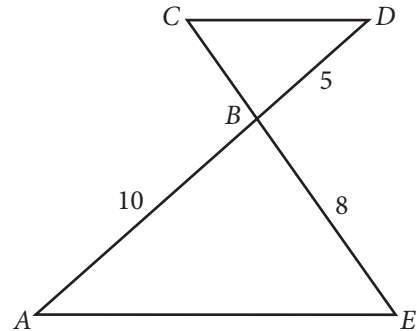
The sales manager of a company awarded a total of \$3000 in bonuses to the most productive salespeople. The bonuses were awarded in amounts of \$250 or \$750. If at least one \$250 bonus and at least one \$750 bonus were awarded, what is one possible number of \$250 bonuses awarded?

17

$$2x(3x + 5) + 3(3x + 5) = ax^2 + bx + c$$

In the equation above,  $a$ ,  $b$ , and  $c$  are constants. If the equation is true for all values of  $x$ , what is the value of  $b$ ?

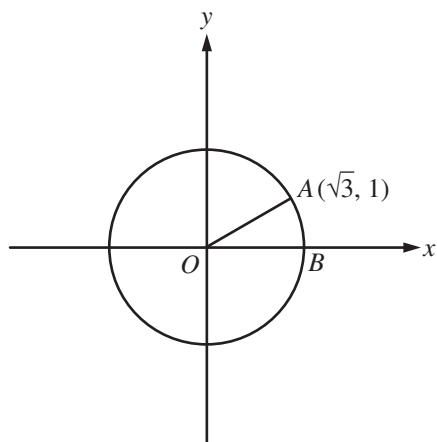
18



In the figure above,  $\overline{AE} \parallel \overline{CD}$  and segment  $AD$  intersects segment  $CE$  at  $B$ . What is the length of segment  $CE$ ?



19



In the  $xy$ -plane above,  $O$  is the center of the circle, and the measure of  $\angle AOB$  is  $\frac{\pi}{a}$  radians. What is the value of  $a$ ?

20

$$ax + by = 12$$

$$2x + 8y = 60$$

In the system of equations above,  $a$  and  $b$  are constants. If the system has infinitely many solutions, what is the value of  $\frac{a}{b}$ ?

## STOP

**If you finish before time is called, you may check your work on this section only.  
Do not turn to any other section.**